

Name _____ Sec _____

MATH 221 Exam 1 Spring 2011

Section 500 P. Yasskin

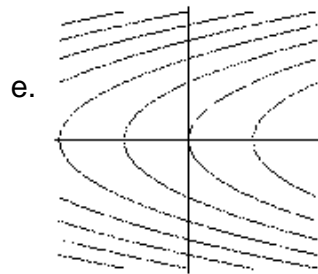
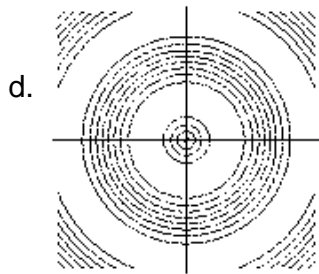
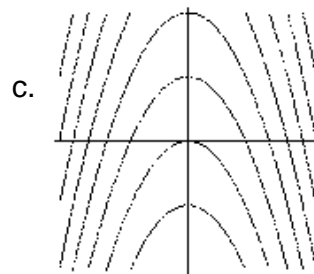

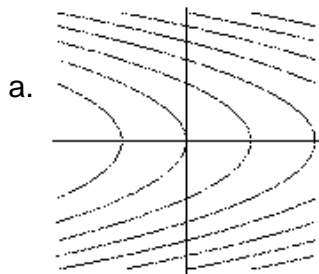
Multiple Choice: (5 points each. No part credit.)

1-10	/50	14	/11
11	/11	15	/11
12	/11		
13	/11	Total	/105

- Consider the line $X = P + t\vec{v}$ where $P = (2, 3, 2)$ and $\vec{v} = (2, -1, 2)$. Drop a perpendicular from the point $Q = (-1, 0, 5)$ to a point R on the line. Then $R =$
HINT: Draw a figure.
 - $\left(\frac{2}{3}, \frac{1}{3}, \frac{2}{3}\right)$
 - $\left(\frac{8}{3}, \frac{8}{3}, \frac{8}{3}\right)$
 - $\left(\frac{2}{3}, -\frac{1}{3}, \frac{2}{3}\right)$
 - $(4, 2, 4)$
 - $\left(\frac{8}{3}, \frac{10}{3}, \frac{8}{3}\right)$
- If \vec{u} is 5 cm long and points 30° WEST of NORTH and \vec{v} is 4 cm long and points 30° EAST of NORTH, then $\vec{u} \times \vec{v}$ is
 - 10 cm long and points DOWN.
 - 10 cm long and points UP.
 - 10 cm long and points SOUTH.
 - $10\sqrt{3}$ cm long and points DOWN.
 - $10\sqrt{3}$ cm long and points SOUTH.
- Find the point where the line $(x, y, z) = (3 - 2t, 2 - t, 1 + t)$ intersects the plane $x + y + 3z = 2$. At this point, $x + y + z =$
 - 2
 - 4
 - 6
 - 8
 - The line does not intersect the plane.

4. The graph of the equation $x^2 + 4x - y^2 + 4y + z^2 + 2z = -1$ is a
- hyperboloid of one sheet
 - hyperboloid of two sheets
 - cone
 - hyperbolic paraboloid
 - hyperbolic cylinder
5. For the helix $\vec{r}(t) = (3t, \sin(4t), \cos(4t))$, which of the following is FALSE?
- $\vec{v} = (3, 4 \cos(4t), -4 \sin(4t))$
 - $\vec{a} = (0, -16 \sin(4t), -16 \cos(4t))$
 - $\vec{j} = (0, -64 \cos(4t), 64 \sin(4t))$
 - speed = 25
 - arclength between $(0, 0, 1)$ and $(3\pi, 0, 1)$ is 5π
6. For the helix $\vec{r}(t) = (3t, \sin(4t), \cos(4t))$, which of the following is FALSE?
- $\hat{T} = \left(\frac{3}{5}, \frac{4}{5} \cos(4t), -\frac{4}{5} \sin(4t) \right)$
 - $\hat{N} = (0, -\sin(4t), -\cos(4t))$
 - $\hat{B} = \left(-\frac{4}{5}, -\frac{3}{5} \cos(4t), -\frac{3}{5} \sin(4t) \right)$
 - $a_T = 0$
 - $a_N = 16$

7. Which of the following is the contour plot of $f(x,y) = y^2 + x + 1$?



8. If $P(2,3) = 5$ and $\frac{\partial P}{\partial x}(2,3) = 0.4$ and $\frac{\partial P}{\partial y}(2,3) = -0.3$, estimate $P(2.1,2.8)$.

- a. 4.9
- b. 4.98
- c. 4.99
- d. 5.01
- e. 5.1

9. Currently for a certain box, the length L is 5 cm and increasing at 0.2 cm/sec, the width W is 4 cm and decreasing at 0.3 cm/sec, the height H is 3 cm and increasing at 0.1 cm/sec. Then currently, the volume V is
- increasing at 0.1 cm/sec.
 - decreasing at 0.1 cm/sec.
 - increasing at 0.2 cm/sec.
 - decreasing at 0.2 cm/sec.
 - increasing at 0.3 cm/sec.

10. The temperature of a frying pan is $T = \frac{1}{1 + x^2 + 4y^2}$. An ant is located at $(2, 1)$. In what **unit vector** direction should the ant move to **decrease** the temperature as fast as possible?

- $(-1, -2)$
- $(1, 2)$
- $(1, -2)$
- $\left(\frac{-1}{\sqrt{5}}, \frac{-2}{\sqrt{5}}\right)$
- $\left(\frac{1}{\sqrt{5}}, \frac{2}{\sqrt{5}}\right)$

Work Out: (Points indicated. Part credit possible. Show all work.)

11. (11 points) Find the mass of the helical wire $\vec{r}(t) = (3t, \sin(4t), \cos(4t))$ from $(0, 0, 1)$ to $(3\pi, 0, 1)$ if its linear density is $\rho = x^2 + y^2 + z^2$.

12. (11 points) A bead slides along the helix $\vec{r}(t) = (3t, \sin(4t), \cos(4t))$ from $(0, 0, 1)$ to $(3\pi, 0, 1)$ under the action of the force $\vec{F} = (x, xy, xz)$. Find the work done.

13. (11 points) Find the plane tangent to the graph of the function $z = x^2y + y^3x$ at the point $(x, y) = (2, 1)$. Find the z -intercept.

14. (11 points) Find the plane tangent to the level surface $x \sin z + y \cos z = 3$ at the point $(x, y, z) = \left(3, 2, \frac{\pi}{2}\right)$. Find the z -intercept.

15. (11 points) Determine whether or not each of these limits exists. If it exists, find its value.

a. $\lim_{(x,y) \rightarrow (0,0)} \frac{xy^3}{x^2 + 3y^6}$

b. $\lim_{(x,y) \rightarrow (0,0)} \frac{x^6 + y^6}{(x^2 + y^2)^2}$

c. $\lim_{(x,y) \rightarrow (0,0)} \frac{x + xy^2}{x + x^3}$