

Name _____ ID _____

MATH 251 Exam 1 Spring 2007

Sections 509 Solutions P. Yasskin

1-11	/55
12	/12
13	/12
14	/12
15	/12
Total	/103

Multiple Choice: (5 points each. No part credit.)

1. Find the area of the triangle whose vertices are
 $P = (3, 4, -5)$, $Q = (3, 5, -4)$ and $R = (5, 2, -5)$.

- a. 1
- b. 6
- c. $\sqrt{3}$ Correct Choice
- d. $2\sqrt{3}$
- e. $4\sqrt{3}$

$$\vec{PQ} = Q - P = \langle 0, 1, 1 \rangle \quad \vec{PR} = R - P = \langle 2, -2, 0 \rangle$$

$$\vec{PQ} \times \vec{PR} = \begin{vmatrix} \hat{i} & \hat{j} & \hat{k} \\ 0 & 1 & 1 \\ 2 & -2 & 0 \end{vmatrix} = \hat{i}(0 - -2) - \hat{j}(0 - 2) + \hat{k}(0 - 2) = \langle 2, 2, -2 \rangle$$

$$A = \frac{1}{2} \left| \vec{PQ} \times \vec{PR} \right| = \frac{1}{2} \sqrt{4 + 4 + 4} = \sqrt{3}$$

2. Which of the following is a line perpendicular to the plane $2x - 3y + z = 1$?

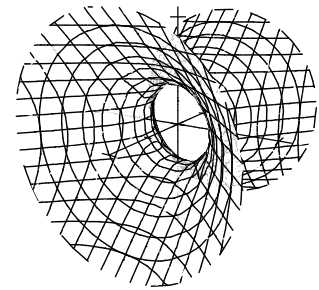
- a. $(x, y, z) = (1 + 2t, 2 + 3t, 3 + t)$
- b. $(x, y, z) = (1 + 2t, 2 - 3t, 3 + t)$ Correct Choice
- c. $\frac{x-1}{2} = \frac{y-2}{3} = \frac{z-3}{1}$
- d. $\frac{x-2}{1} = \frac{y-3}{2} = \frac{z-1}{3}$
- e. $2x + 3y + z = -1$

The normal to the plane is $\vec{N} = \langle 2, -3, 1 \rangle$, which must be the direction $\vec{v} = \langle v_1, v_2, v_3 \rangle = \langle 2, -3, 1 \rangle$ of the line in either the parametric form $X = P + t\vec{v}$ or the symmetric form $\frac{x-p}{v_1} = \frac{y-q}{v_2} = \frac{z-r}{v_3}$.

3. An airplane is travelling due North with constant speed and constant altitude as it flies over College Station. Since its path is part of a circle around the earth, its acceleration points directly toward the center of the earth. In which direction does it binormal \hat{B} point?
- Up
 - North
 - East
 - South
 - West **Correct Choice**

\vec{v} is North. \vec{a} is Down. So $\hat{B} = \frac{\hat{v} \times \hat{a}}{|\hat{v} \times \hat{a}|}$ points West by the right hand rule.

4. The plot at the right is which surface?

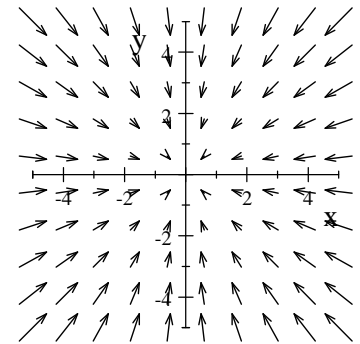


- $x = 4y^2 - 4z^2$
- $x = 4y^2 + 4z^2$
- $x^2 - y^2 - z^2 = 4$
- $x^2 - y^2 - z^2 = -4$ **Correct Choice**
- $4x^2 + y^2 + z^2 = 1$

This is a hyperboloid of 1 sheet. e is an ellipsoid. a and b are paraboloids.

d is correct because the equation $x^2 + 4 = y^2 + z^2$ shows $y^2 + z^2 \geq 4$.

5. The plot at the right represents which vector field?



- $\vec{A} = \langle -x, -y \rangle$ **Correct Choice**
- $\vec{B} = \left\langle \frac{-x}{\sqrt{x^2 + y^2}}, \frac{-y}{\sqrt{x^2 + y^2}} \right\rangle$
- $\vec{C} = \langle x, y \rangle$
- $\vec{D} = \left\langle \frac{x}{\sqrt{x^2 + y^2}}, \frac{y}{\sqrt{x^2 + y^2}} \right\rangle$
- $\vec{E} = \langle -y, x \rangle$

The vectors all point radially inward. So it must be either: \vec{A} or \vec{B} .

The vectors get shorter near the origin. So it cannot be \vec{B} which is a unit vector field.

6. For the curve $\vec{r}(t) = (e^t, \sqrt{2}t, e^{-t})$ which of the following is FALSE?

a. $\vec{v} = \langle e^t, \sqrt{2}, -e^{-t} \rangle$

b. $\vec{a} = \langle e^t, 0, e^{-t} \rangle$

c. $|\vec{v}| = e^t + e^{-t}$

d. Arc length between $t = 0$ and $t = 1$ is $e + \frac{1}{e}$ Correct Choice

e. $a_T = e^t - e^{-t}$

\vec{v} and \vec{a} are correct by differentiation.

$$|\vec{v}| = \sqrt{e^{2t} + 2 + e^{-2t}} = e^t + e^{-t} \quad a_T = \frac{d|\vec{v}|}{dt} = e^t - e^{-t}$$

$$L = \int ds = \int |\vec{v}| dt = \int_0^1 (e^t + e^{-t}) dt = [e^t - e^{-t}]_0^1 = (e^1 - e^{-1}) - (1 - 1) = e - \frac{1}{e}$$

7. A wire in the shape of the curve $\vec{r}(t) = (e^t, \sqrt{2}t, e^{-t})$ has linear mass density $\rho = x + z$. Find its total mass between $t = 0$ and $t = 1$.

a. $\frac{e^2}{2} + 1 - \frac{1}{2e^2}$

b. $\frac{e^2}{2} + 2 + \frac{1}{2e^2}$

c. $\frac{e^2}{2} + 2 - \frac{1}{2e^2}$ Correct Choice

d. $e + \frac{1}{e}$

e. $e - \frac{1}{e}$

$$M = \int \rho ds = \int (x + z) |\vec{v}| dt = \int_0^1 (e^t + e^{-t})(e^t + e^{-t}) dt = \int_0^1 (e^{2t} + 2 + e^{-2t}) dt$$

$$= \left[\frac{e^{2t}}{2} + 2t + \frac{e^{-2t}}{-2} \right]_0^1 = \left(\frac{e^2}{2} + 2 + \frac{e^{-2}}{-2} \right) - \left(\frac{1}{2} + \frac{1}{-2} \right) = \frac{e^2}{2} + 2 - \frac{1}{2e^2}$$

8. Find the work done to move an object along the curve $\vec{r}(t) = (e^t, \sqrt{2}t, e^{-t})$ between $t = 0$ and $t = 1$ by the force $\vec{F} = \langle z, 0, -x \rangle$?

a. $2e + \frac{2}{e}$

b. $2e - \frac{2}{e}$

c. $e + \frac{1}{e}$

d. $e - \frac{1}{e}$

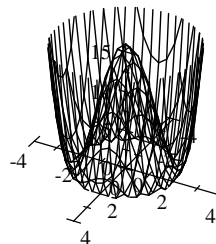
e. 2 Correct Choice

$$\vec{F}(\vec{r}(t)) = \langle e^{-t}, 0, -e^t \rangle \quad \vec{v} = \langle e^t, \sqrt{2}, -e^{-t} \rangle$$

$$W = \int \vec{F} \cdot d\vec{s} = \int_0^1 \vec{F}(\vec{r}(t)) \cdot \vec{v} dt = \int_0^1 (e^{-t}e^t + e^t e^{-t}) dt = \int_0^1 2 dt = [2t]_0^1 = 2$$

9. The plot at the right is the graph of which function?

- a. $f(x, y) = x^2 + y^2 - 4$
- b. $f(x, y) = (x - 2)^2 + (y - 2)^2$
- c. $f(x, y) = 2x^2 + 2y^2$
- d. $f(x, y) = (x^2 + y^2 - 4)^2$ **Correct Choice**
- e. $f(x, y) = (x^2 + y^2)^2 - 16$



The graph is 0 on the circle $x^2 + y^2 = 4$. So the function is not (b) or (c).

The graph is always positive. So the function is not (a) or (e) which are negative when $x = y = 0$.

10. If $z = x^{3e}e^{3y}$ which of the following is FALSE?

- a. $\frac{\partial z}{\partial x} = 3ex^{3e-1}e^{3y}$
- b. $\frac{\partial z}{\partial y} = 3x^{3e}e^{3y}$
- c. $\frac{\partial^2 z}{\partial x^2} = (9e^2 - 3e)x^{3e-2}e^{3y}$
- d. $\frac{\partial^2 z}{\partial x \partial y} = 9ex^{3e-1}e^{3y}$
- e. $\frac{\partial^2 z}{\partial y \partial x} = 9e^2x^{3e-1}e^{3y}$ **Correct Choice**

$\frac{\partial^2 z}{\partial y \partial x}$ must equal $\frac{\partial^2 z}{\partial x \partial y}$ and (e) is wrong.

11. Find the plane tangent to the graph of $z = x \ln(y)$ at the point $(2, e)$. Its z -intercept is

- a. e
- b. 2
- c. 0
- d. -2 **Correct Choice**
- e. $-e$

$$f = x \ln(y) \quad f(2, e) = 2 \quad z = f(2, e) + f_x(2, e)(x - 2) + f_y(2, e)(y - e)$$

$$f_x = \ln(y) \quad f_x(2, e) = 1 \quad = 2 + 1(x - 2) + \frac{2}{e}(y - e)$$

$$f_y = \frac{x}{y} \quad f_y(2, e) = \frac{2}{e} \quad \text{When } x = y = 0, \text{ we have } z = 2 + (-2) + \frac{2}{e}(-e) = -2.$$

Work Out: (12 points each. Part credit possible. Show all work.)

12. Find the vector projection of the vector $\vec{a} = \langle 3, 2, 1 \rangle$ along the vector $\vec{b} = \langle -2, 1, 2 \rangle$.

$$\vec{a} \cdot \vec{b} = -6 + 2 + 2 = -2 \quad \vec{b} \cdot \vec{b} = 4 + 1 + 4 = 9$$

$$\text{proj}_{\vec{b}} \vec{a} = \frac{\vec{a} \cdot \vec{b}}{\vec{b} \cdot \vec{b}} \vec{b} = \frac{-2}{9} \langle -2, 1, 2 \rangle = \left\langle \frac{4}{9}, \frac{-2}{9}, \frac{-4}{9} \right\rangle$$

13. Find the point where the line $\frac{x-4}{-1} = \frac{y-7}{2} = \frac{z-5}{2}$ intersects the plane $x + y - 3z = 6$.

METHOD 1:

The parametric version of the line is $x = 4 - t$ $y = 7 + 2t$ $z = 5 + 2t$.

Substitute into the plane and solve for t :

$$6 = x + y - 3z = (4 - t) + (7 + 2t) - 3(5 + 2t) = -4 - 5t \quad 5t = -10 \quad t = -2$$

Substitute back into the line:

$$x = 4 - t = 6 \quad y = 7 + 2t = 3 \quad z = 5 + 2t = 1$$

The point is $(6, 3, 1)$

METHOD 2:

Multiply the line by -2 : $2x - 8 = -y + 7 = -z + 5$

Express y and z in terms of x : $y = -2x + 15$ $z = -2x + 13$

Substitute into the plane and solve for x :

$$6 = x + y - 3z = x + (-2x + 15) - 3(-2x + 13) = 5x - 24 \quad 5x = 30 \quad x = 6$$

Substitute back into y and z :

$$y = -2x + 15 = 3 \quad z = -2x + 13 = 1$$

The point is $(6, 3, 1)$

14. The pressure, P , volume, V , and temperature, T , of an ideal gas are related by

$$P = \frac{kT}{V} \quad \text{for some constant } k.$$

At a certain instant, for a certain sample $k = 4 \frac{\text{cm}^3 \cdot \text{atm}}{^\circ\text{K}}$, $V = 1000 \text{ cm}^3$, and $T = 300^\circ\text{K}$.

At that instant, the volume and temperature are increasing at $\frac{dV}{dt} = 10 \frac{\text{cm}^3}{\text{sec}}$, and $\frac{dT}{dt} = 2 \frac{^\circ\text{K}}{\text{sec}}$.

At that instant, what is the pressure, is it increasing or decreasing and at what rate?

$$P = \frac{kT}{V} = \frac{4 \cdot 300}{1000} \frac{\text{cm}^3 \cdot \text{atm}}{^\circ\text{K}} \frac{^\circ\text{K}}{\text{cm}^3} = 1.2 \text{ atm}$$

$$\frac{dP}{dt} = \frac{\partial P}{\partial V} \frac{dV}{dt} + \frac{\partial P}{\partial T} \frac{dT}{dt} = \frac{-kT}{V^2} \frac{dV}{dt} + \frac{k}{V} \frac{dT}{dt} = \frac{-4 \cdot 300}{1000^2} \cdot 10 + \frac{4}{1000} \cdot 2 = -\frac{1}{250} = -0.004 \frac{\text{atm}}{\text{sec}}$$

Since $\frac{dP}{dt}$ is negative, the pressure is decreasing.

15. For an adjustable lens, the distance from the lens to the image, v , is related to the distance from the lens to the object, u , and the focal length, f , by the formula

$$\frac{1}{v} = \frac{1}{f} - \frac{1}{u} \quad \text{or} \quad v = \frac{fu}{u-f}$$

Currently $f = 4 \text{ cm}$ $u = 6 \text{ cm}$ and so $v = 12 \text{ cm}$

If the focal length is increased by $\Delta f = 0.3 \text{ cm}$, and the distance from the lens to the object is increased by $\Delta u = 0.4 \text{ cm}$, use differentials to estimate how much the image moves.

Does the distance from the lens to the image increase or decrease?

$$\begin{aligned} \Delta v &= \frac{\partial v}{\partial f} \Delta f + \frac{\partial v}{\partial u} \Delta u = \frac{(u-f)u - fu(-1)}{(u-f)^2} \Delta f + \frac{(u-f)f - fu(1)}{(u-f)^2} \Delta u = \frac{u^2}{(u-f)^2} \Delta f + \frac{-f^2}{(u-f)^2} \Delta u \\ &= \frac{36}{(2)^2} \cdot 0.3 + \frac{-16}{(2)^2} \cdot 0.4 = 9 \cdot 0.3 - 4 \cdot 0.4 = 2.7 - 1.6 = 1.1 \quad \text{increases} \end{aligned}$$