

Name _____ Sec _____

MATH 251 Honors Exam 1 Spring 2011

Section 500 Solutions P. Yasskin

Multiple Choice: (5 points each. No part credit.)

1-10	/50	14	/11
11	/11	15	/11
12	/11		
13	/11	Total	/105

1. Consider the line $X = P + t\vec{v}$ where $P = (2, 3, 2)$ and $\vec{v} = (2, -1, 2)$. Drop a perpendicular from the point $Q = (-1, 0, 5)$ to a point R on the line. Then $R =$
 HINT: Draw a figure.

- a. $(\frac{2}{3}, \frac{1}{3}, \frac{2}{3})$
- b. $(\frac{8}{3}, \frac{8}{3}, \frac{8}{3})$ Correct Choice
- c. $(\frac{2}{3}, -\frac{1}{3}, \frac{2}{3})$
- d. $(4, 2, 4)$
- e. $(\frac{8}{3}, \frac{10}{3}, \frac{8}{3})$

$$\vec{PQ} = Q - P = (-3, -3, 3) \quad \text{proj}_{\vec{v}} \vec{PQ} = \frac{\vec{PQ} \cdot \vec{v}}{|\vec{v}|^2} \vec{v} = \frac{-6 + 3 + 6}{9} (2, -1, 2) = (\frac{2}{3}, -\frac{1}{3}, \frac{2}{3})$$

$$R = P + \text{proj}_{\vec{v}} \vec{PQ} = (\frac{8}{3}, \frac{8}{3}, \frac{8}{3})$$

2. If \vec{u} is 5 cm long and points 30° WEST of NORTH and \vec{v} is 4 cm long and points 30° EAST of NORTH, then $\vec{u} \times \vec{v}$ is
- a. 10 cm long and points DOWN.
 - b. 10 cm long and points UP.
 - c. 10 cm long and points SOUTH.
 - d. $10\sqrt{3}$ cm long and points DOWN. Correct Choice
 - e. $10\sqrt{3}$ cm long and points SOUTH.

Since the angle between the vectors is $\theta = 60^\circ$, the length is

$$|\vec{u} \times \vec{v}| = |\vec{u}||\vec{v}|\sin\theta = 5 \cdot 4 \cdot \frac{\sqrt{3}}{2} = 10\sqrt{3}$$

Put your right hand fingers pointing 30° WEST of NORTH with the palm facing 30° EAST of NORTH, then your thumb points DOWN.

3. Find the point where the line $(x, y, z) = (3 - 2t, 2 - t, 1 + t)$ intersects the plane $x + y + 3z = 2$. At this point, $x + y + z =$
- a. 2
 - b. 4
 - c. 6
 - d. 8
 - e. The line does not intersect the plane. Correct Choice

Substitute the line into the plane: $(3 - 2t) + (2 - t) + 3(1 + t) = 2$ or $8 = 2$ which is impossible. So the line does not intersect the plane.

4. The graph of the equation $x^2 + 4x - y^2 + 4y + z^2 + 2z = -1$ is a

- a. hyperboloid of one sheet
- b. hyperboloid of two sheets
- c. cone **Correct Choice**
- d. hyperbolic paraboloid
- e. hyperbolic cylinder

x^2 , y^2 , and z^2 are all present with two '+'s and one -. So this is a hyperboloid or cone.

Complete the squares to get $(x + 2)^2 - (y - 2)^2 + (z + 1)^2 = 0$ which is a cone.

5. For the helix $\vec{r}(t) = (3t, \sin(4t), \cos(4t))$, which of the following is FALSE?

- a. $\vec{v} = (3, 4 \cos(4t), -4 \sin(4t))$
- b. $\vec{a} = (0, -16 \sin(4t), -16 \cos(4t))$
- c. $\vec{j} = (0, -64 \cos(4t), 64 \sin(4t))$
- d. speed = 25 **Correct Choice**
- e. arclength between $(0, 0, 1)$ and $(3\pi, 0, 1)$ is 5π

$$\text{speed} = |\vec{v}| = \sqrt{9 + 16 \cos^2(4t) + 16 \sin^2(4t)} = \sqrt{25} = 5$$

6. For the helix $\vec{r}(t) = (3t, \sin(4t), \cos(4t))$, which of the following is FALSE?

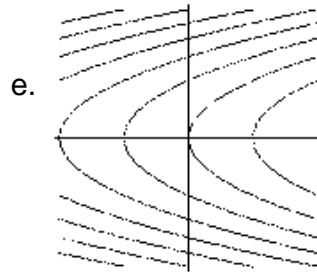

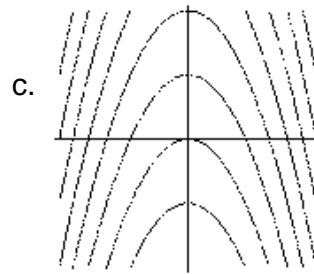

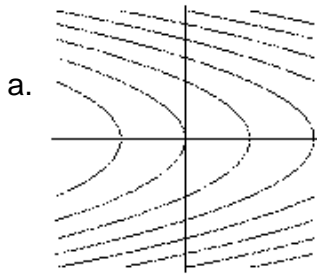
- a. $\hat{T} = \left(\frac{3}{5}, \frac{4}{5} \cos(4t), -\frac{4}{5} \sin(4t) \right)$
- b. $\hat{N} = (0, -\sin(4t), -\cos(4t))$
- c. $\hat{B} = \left(-\frac{4}{5}, -\frac{3}{5} \cos(4t), -\frac{3}{5} \sin(4t) \right)$ **Correct Choice**
- d. $a_T = 0$
- e. $a_N = 16$

$$\vec{v} \times \vec{a} = \begin{vmatrix} \hat{i} & \hat{j} & \hat{k} \\ 3 & 4 \cos(4t) & -4 \sin(4t) \\ 0 & -16 \sin(4t) & -16 \cos(4t) \end{vmatrix} = 16(-4, 3 \cos(4t), -3 \sin(4t))$$

$$|\vec{v} \times \vec{a}| = 16\sqrt{16 + 9 \cos^2(4t) + 9 \sin^2(4t)} = 80$$

$$\hat{B} = \frac{\vec{v} \times \vec{a}}{|\vec{v} \times \vec{a}|} = \left(-\frac{4}{5}, \frac{3}{5} \cos(4t), -\frac{3}{5} \sin(4t) \right)$$

7. Which of the following is the contour plot of $f(x,y) = y^2 + x + 1$?



(a) Correct Choice

The contours are $y^2 + x + 1 = C$ or $x = C - 1 - y^2$ which are parabolas opening left.

8. If $P(2,3) = 5$ and $\frac{\partial P}{\partial x}(2,3) = 0.4$ and $\frac{\partial P}{\partial y}(2,3) = -0.3$, estimate $P(2.1,2.8)$.

- a. 4.9
- b. 4.98
- c. 4.99
- d. 5.01
- e. 5.1 Correct Choice

$$P(x,y) = P(2,3) + P_x(2,3)(x-2) + P_y(2,3)(y-3)$$

$$\begin{aligned} P(2.1,2.8) &= P(2,3) + P_x(2,3)(2.1-2) + P_y(2,3)(2.8-3) \\ &= 5 + 0.4(0.1) - 0.3(-0.2) = 5.1 \end{aligned}$$

9. Currently for a certain box, the length L is 5 cm and increasing at 0.2 cm/sec, the width W is 4 cm and decreasing at 0.3 cm/sec, the height H is 3 cm and increasing at 0.1 cm/sec. Then currently, the volume V is

- a. increasing at 0.1 cm/sec.
- b. decreasing at 0.1 cm/sec. Correct Choice
- c. increasing at 0.2 cm/sec.
- d. decreasing at 0.2 cm/sec.
- e. increasing at 0.3 cm/sec.

$$V = LWH \quad \frac{dL}{dt} = 0.2 \quad \frac{dW}{dt} = -0.3 \quad \frac{dH}{dt} = 0.1$$

$$\begin{aligned} \frac{dV}{dt} &= \frac{\partial V}{\partial L} \frac{dL}{dt} + \frac{\partial V}{\partial W} \frac{dW}{dt} + \frac{\partial V}{\partial H} \frac{dH}{dt} = WH \frac{dL}{dt} + LH \frac{dW}{dt} + LW \frac{dH}{dt} \\ &= 4 \cdot 3 \cdot 0.2 - 5 \cdot 3 \cdot 0.3 + 5 \cdot 4 \cdot 0.1 = -0.1 \end{aligned}$$

10. The temperature of a frying pan is $T = \frac{1}{1+x^2+4y^2}$. An ant is located at $(2, 1)$. In what **unit vector** direction should the ant move to **decrease** the temperature as fast as possible?
- $(-1, -2)$
 - $(1, 2)$ Part Credit
 - $(1, -2)$
 - $\left(\frac{-1}{\sqrt{5}}, \frac{-2}{\sqrt{5}}\right)$ Part Credit
 - $\left(\frac{1}{\sqrt{5}}, \frac{2}{\sqrt{5}}\right)$ Correct Choice

$$\vec{\nabla}T = \left(\frac{-2x}{(1+x^2+4y^2)^2}, \frac{-8y}{(1+x^2+4y^2)^2} \right) \quad \vec{\nabla}T|_{(2,1)} = \left(\frac{-4}{81}, \frac{-8}{81} \right)$$

$$|\vec{\nabla}T| = \frac{\sqrt{16+64}}{81} = \frac{\sqrt{80}}{81} = \frac{4\sqrt{5}}{81}$$

Maximum decrease is in the direction of $\vec{v} = -\vec{\nabla}T|_{(2,1)} = \left(\frac{4}{81}, \frac{8}{81}\right)$.

The unit vector is $\frac{\vec{v}}{|\vec{v}|} = \frac{81}{4\sqrt{5}} \left(\frac{4}{81}, \frac{8}{81}\right) = \left(\frac{1}{\sqrt{5}}, \frac{2}{\sqrt{5}}\right)$

Work Out: (Points indicated. Part credit possible. Show all work.)

11. (11 points) Find the mass of the helical wire $\vec{r}(t) = (3t, \sin(4t), \cos(4t))$ from $(0, 0, 1)$ to $(3\pi, 0, 1)$ if its linear density is $\rho = x^2 + y^2 + z^2$.

$$\vec{v} = (3, 4\cos(4t), -4\sin(4t)) \quad |\vec{v}| = \sqrt{9 + 16\cos^2(4t) + 16\sin^2(4t)} = 5$$

$$\rho(\vec{r}(t)) = 9t^2 + \sin^2(4t) + \cos^2(4t) = 9t^2 + 1$$

$$M = \int_{(0,0,1)}^{(3\pi,0,1)} \rho ds = \int_0^\pi \rho(\vec{r}(t)) |\vec{v}| dt = \int_0^\pi (9t^2 + 1) 5 dt = 5[3t^3 + t]_0^\pi = 5(3\pi^3 + \pi)$$

12. (11 points) A bead slides along the helix $\vec{r}(t) = (3t, \sin(4t), \cos(4t))$ from $(0, 0, 1)$ to $(3\pi, 0, 1)$ under the action of the force $\vec{F} = (x, xy, xz)$. Find the work done.

$$\vec{v} = (3, 4\cos(4t), -4\sin(4t)) \quad \vec{F}(\vec{r}(t)) = (3t, 3t\sin(4t), 3t\cos(4t))$$

$$\vec{F} \cdot \vec{v} = 9t + 12t\cos(4t)\sin(4t) - 12t\sin(4t)\cos(4t) = 9t$$

$$W = \int_{(0,0,1)}^{(3\pi,0,1)} \vec{F} \cdot d\vec{s} = \int_0^\pi \vec{F} \cdot \vec{v} dt = \int_0^\pi 9t dt = \left[\frac{9t^2}{2} \right]_0^\pi = \frac{9}{2}\pi^2$$

13. (11 points) Find the volume of the parallelepiped with edges $\vec{u} = (2, 0, 1, 0)$, $\vec{v} = (0, 3, 2, 0)$ and $\vec{w} = (1, 0, 0, 2)$ in \mathbb{R}^4 .

$$\perp(\vec{u}, \vec{v}, \vec{w}) = \begin{vmatrix} \hat{i} & \hat{j} & \hat{k} & \hat{l} \\ 2 & 0 & 1 & 0 \\ 0 & 3 & 2 & 0 \\ 1 & 0 & 0 & 2 \end{vmatrix} = \hat{i} \begin{vmatrix} 0 & 1 & 0 \\ 3 & 2 & 0 \\ 0 & 0 & 2 \end{vmatrix} - \hat{j} \begin{vmatrix} 2 & 1 & 0 \\ 0 & 2 & 0 \\ 1 & 0 & 2 \end{vmatrix} + \hat{k} \begin{vmatrix} 2 & 0 & 0 \\ 0 & 3 & 0 \\ 1 & 0 & 2 \end{vmatrix} - \hat{l} \begin{vmatrix} 2 & 0 & 1 \\ 0 & 3 & 2 \\ 1 & 0 & 0 \end{vmatrix}$$

$$= (-6, -8, 12, 3)$$

$$V = |\perp(\vec{u}, \vec{v}, \vec{w})| = \sqrt{36 + 64 + 144 + 9} = \sqrt{253}$$

14. (11 points) Find the plane tangent to the level surface $x \sin z + y \cos z = 3$ at the point $(x, y, z) = (3, 2, \frac{\pi}{2})$. Find the z -intercept.

$$F(x, y, z) = x \sin z + y \cos z \quad \nabla F = (\sin z, \cos z, x \cos z - y \sin z) \quad \vec{N} = \nabla F \Big|_{(3, 2, \pi/2)} = (1, 0, -2)$$

$$\vec{N} \cdot X = \vec{N} \cdot P \quad x - 2z = 3 - 2\left(\frac{\pi}{2}\right) = 3 - \pi$$

The plane is $x - 2z = 3 - \pi$ or $z = \frac{1}{2}(x + \pi - 3) = \frac{1}{2}x + \frac{\pi}{2} - \frac{3}{2}$. The z -intercept is $\frac{\pi}{2} - \frac{3}{2}$.

15. (11 points) Determine whether or not each of these limits exists. If it exists, find its value.

a. $\lim_{(x,y) \rightarrow (0,0)} \frac{xy^3}{x^2 + 3y^6}$

Approach along the x -axis:

$$\lim_{\substack{y=0 \\ x \rightarrow 0}} \frac{xy^3}{x^2 + 3y^6} = \lim_{x \rightarrow 0} \frac{0}{3y^6} = 0$$

Approach along $x = y^3$:

$$\lim_{\substack{x=y^3 \\ y \rightarrow 0}} \frac{xy^3}{x^2 + 3y^6} = \lim_{x \rightarrow 0} \frac{y^6}{4y^6} = \frac{1}{4}$$

Limit Does Not Exist

b. $\lim_{(x,y) \rightarrow (0,0)} \frac{x^6 + y^6}{(x^2 + y^2)^2}$

Use polar coordinates $x = r \cos \theta$ $y = r \sin \theta$

$$\lim_{(x,y) \rightarrow (0,0)} \frac{x^6 + y^6}{(x^2 + y^2)^2} = \lim_{r \rightarrow 0} \frac{r^6 \cos^6 \theta + r^6 \sin^6 \theta}{r^4} = \lim_{r \rightarrow 0} r^2 (\cos^6 \theta + \sin^6 \theta) = 0$$

because $\cos^6 \theta + \sin^6 \theta$ is bounded between 0 and 1.

Limit Exists with value 0.

c. $\lim_{(x,y) \rightarrow (0,0)} \frac{x + xy^2}{x + x^3}$

Factor x out of the top and bottom. Then evaluate:

$$\lim_{(x,y) \rightarrow (0,0)} \frac{x + xy^2}{x + x^3} = \lim_{(x,y) \rightarrow (0,0)} \frac{x(1 + y^2)}{x(1 + x^2)} = \lim_{(x,y) \rightarrow (0,0)} \frac{1 + y^2}{1 + x^2} = 1$$

Limit Exists with value 1.