

Name _____ ID _____

1-10	/60
11	/10
12	/10
13	/10
14	/10

MATH 172
Section 504

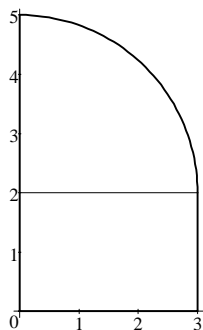
EXAM 1
Solutions

Spring 1999
P. Yasskin

Multiple Choice: (6 points each)

1. Evaluate $\int_0^3 2 + \sqrt{9 - x^2} \, dx$ by interpreting it as an area.

- a. $6 + \frac{9\pi}{4}$ correct choice
- b. $3 + 9\pi$
- c. $2 + \frac{9\pi}{2}$
- d. $2 + 9\pi$
- e. $6 + 9\pi$



$$\int_0^3 2 + \sqrt{9 - x^2} \, dx = \text{rectangle} + \text{quarter circle}$$

$$= 3 \cdot 2 + \frac{1}{4}\pi(3)^2 = 6 + \frac{9\pi}{4}$$

2. Compute: $\int_1^2 \left(x^3 + x + \frac{1}{x^3} \right) dx$

- a. $\frac{47}{8}$
- b. $\frac{45}{8}$ correct choice
- c. $\frac{351}{64}$
- d. $\frac{415}{64}$
- e. $\frac{417}{64}$

$$\int_1^2 \left(x^3 + x + \frac{1}{x^3} \right) dx = \left[\frac{x^4}{4} + \frac{x^2}{2} - \frac{1}{2x^2} \right]_1^2 = \left[4 + 2 - \frac{1}{8} \right] - \left[\frac{1}{4} + \frac{1}{2} - \frac{1}{2} \right] = \frac{45}{8}$$

3. Compute: $\int_0^{\pi/4} \cos^3 \theta \sin \theta \, d\theta$

- a. $-\frac{3}{16}$
- b. $-\frac{1}{16}$
- c. $\frac{1}{16}$
- d. $\frac{3}{16}$ correctchoice
- e. 3

$$\begin{aligned}
 u &= \cos \theta & du &= -\sin \theta \, d\theta \\
 \int_0^{\pi/4} \cos^3 \theta \sin \theta \, d\theta &= -\int_{\theta=0}^{\pi/4} u^3 \, du = -\left[\frac{u^4}{4}\right] = -\left[\frac{\cos^4 \theta}{4}\right]_0^{\pi/4} \\
 &= -\left[\frac{1}{4}\left(\frac{1}{\sqrt{2}}\right)^4\right] + \left[\frac{1}{4}\right] = -\frac{1}{16} + \frac{1}{4} = \frac{3}{16}
 \end{aligned}$$

4. Compute: $\frac{d}{dx} \int_x^{x^2} e^{t^2} \, dt$

- a. $e^{x^4} - e^{x^2}$
- b. $e^{x^4} 2x - e^{x^2}$ correctchoice
- c. $e^{x^4} 4x^3 - e^{x^2}$
- d. $e^{4x^2} - e^{x^2}$
- e. $e^{4x^2} 2x - e^{x^2}$

Let $F(t)$ be an antiderivative of e^{t^2} . Then $F'(t) = e^{t^2}$. So $\int_x^{x^2} e^{t^2} \, dt = F(x^2) - F(x)$.

Thus by chain rule: $\frac{d}{dx} \int_x^{x^2} e^{t^2} \, dt = F'(x^2) \cdot 2x - F'(x) = e^{x^4} 2x - e^{x^2}$

5. Compute: $\int \frac{x^2 + 1}{(x^3 + 3x)^2} \, dx$

- a. $\frac{-3}{x^3 + 3x} + C$
- b. $\frac{-1}{x^3 + 3x} + C$
- c. $\frac{-1}{3x^3 + 9x} + C$ correctchoice
- d. $\frac{1}{x^3 + 3x} + C$
- e. $\frac{3}{x^3 + 3x} + C$

$$\begin{aligned}
 u &= x^3 + 3x & du &= (3x^2 + 3) \, dx = 3(x^2 + 1) \, dx & \frac{1}{3} du &= (x^2 + 1) \, dx \\
 \int \frac{x^2 + 1}{(x^3 + 3x)^2} \, dx &= \frac{1}{3} \int \frac{1}{u^2} \, du = \frac{-1}{3u} + C = \frac{-1}{3x^3 + 9x} + C
 \end{aligned}$$

6. Compute: $\int_1^e x^4 \ln x \, dx$

a. $\frac{4}{25}e^5 + \frac{1}{25}$ correct choice

b. $\frac{4}{25}e^5 - \frac{1}{25}$

c. $\frac{4}{25}(e^5 - 1)$

d. $\frac{4}{25}(e^5 + 1)$

e. $\frac{1}{5}(e^5 + 1)$

$$u = \ln x \quad dv = x^4 \, dx$$

$$du = \frac{1}{x} \, dx \quad v = \frac{x^5}{5}$$

$$\begin{aligned} \int_1^e x^4 \ln x \, dx &= \left[\frac{x^5}{5} \ln x - \int \frac{x^4}{5} \, dx \right]_1^e = \left[\frac{x^5}{5} \ln x - \frac{x^5}{25} \right]_1^e \\ &= \left[\frac{e^5}{5} \ln e - \frac{e^5}{25} \right] - \left[\frac{1}{5} \ln 1 - \frac{1}{25} \right] = \left(\frac{1}{5} - \frac{1}{25} \right) e^5 + \frac{1}{25} = \frac{4}{25} e^5 + \frac{1}{25} \end{aligned}$$

7. Find the area between the curves $y = 12 - x^2$ and $y = 2x^2$.

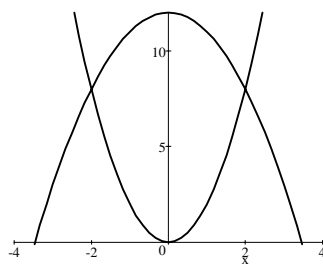
a. 2

b. 4

c. 12

d. 24

e. 32 correct choice



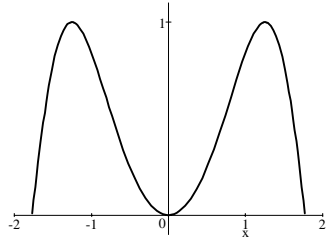
$$12 - x^2 = 2x^2$$

$$12 = 3x^2$$

$$x = \pm 2$$

$$A = \int_{-2}^2 (12 - x^2) - (2x^2) \, dx = \int_{-2}^2 (12 - 3x^2) \, dx = [12x - x^3]_{-2}^2 = 32$$

8. The region below $y = \sin(x^2)$ above the x -axis for $0 \leq x \leq \sqrt{\pi}$ is rotated about the y -axis. Find the volume of the solid swept out.



- a. $\frac{\pi}{2}$
b. π
c. 2π correctchoice
d. 3π
e. 4π

Thin cylinders with radius $r = x$ and height $h = \sin(x^2)$.

$$V = \int_0^{\sqrt{\pi}} 2\pi x \sin(x^2) dx = -\pi \cos(x^2) \Big|_0^{\sqrt{\pi}} = -\pi \cos \pi + \pi \cos 0 = 2\pi$$

9. The force needed to stretch a **superspring** x m beyond its natural length is $F = kx^3$. If it takes 32 N to stretch the superspring by 2 m, how much work is done in stretching it from 1 m to 2 m?
- a. 3
b. 7
c. 15 correctchoice
d. 31
e. 63

$$F = kx^3 \quad 32 = k 2^3 = 8k \quad k = 4 \quad F = 4x^3$$

$$W = \int F dx = \int_1^2 4x^3 dx = x^4 \Big|_1^2 = 15$$

10. The mass density of a 9 m rod is $\rho = \frac{18}{(1+x)^3} \frac{\text{kg}}{\text{m}}$ for $0 \leq x \leq 9$. Find the average density of the rod.
- a. $.495 \frac{\text{kg}}{\text{m}}$
b. $.99 \frac{\text{kg}}{\text{m}}$ correctchoice
c. $.4995 \frac{\text{kg}}{\text{m}}$
d. $.999 \frac{\text{kg}}{\text{m}}$
e. $.49995 \frac{\text{kg}}{\text{m}}$

$$\rho_{\text{ave}} = \frac{1}{9} \int_0^9 \frac{18}{(1+x)^3} dx = 2 \left[\frac{(1+x)^{-2}}{-2} \right]_0^9 = \left[\frac{-1}{(1+x)^2} \right]_0^9 = \frac{-1}{100} - \frac{-1}{1} = .99$$

11. (10 points) Compute: $\int_0^1 \frac{\arctan x}{1+x^2} dx$

$$\int_0^1 \frac{\arctan x}{1+x^2} dx = \int_0^{\pi/4} u du \quad u = \arctan x$$

$$= \frac{u^2}{2} \Big|_0^{\pi/4} = \frac{\pi^2}{32} \quad du = \frac{1}{1+x^2} dx$$

$$x = 1 \quad @ \quad u = \arctan 1 = \frac{\pi}{4}$$

$$x = 0 \quad @ \quad u = \arctan 0 = 0$$

OR

$$= \int_{x=0}^1 u du = \frac{u^2}{2} \Big|_{x=0}^1 = \frac{(\arctan x)^2}{2} \Big|_0^1 = \frac{(\arctan 1)^2}{2} - \frac{(\arctan 0)^2}{2} = \frac{\pi^2}{32}$$

12. (10 points) Compute: $\int \sec^3 \theta \tan^3 \theta d\theta$

$$\int \sec^3 \theta \tan^3 \theta d\theta = \int \sec^2 \theta \tan^2 \theta \sec \theta \tan \theta d\theta \quad du = \sec \theta \tan \theta d\theta$$

$$= \int u^2(u^2 - 1) du \quad u = \sec \theta$$

$$= \int (u^4 - u^2) du \quad \tan^2 \theta = \sec^2 \theta - 1 = u^2 - 1$$

$$= \frac{u^5}{5} - \frac{u^3}{3} + C = \frac{\sec^5 \theta}{5} - \frac{\sec^3 \theta}{3} + C$$

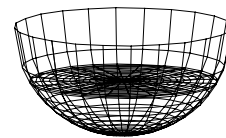
13. (10 points)

A hemispherical bowl of radius 2 ft

is filled to a depth of 1 ft.

Find the volume of the water.

HINT: Slice it horizontally.



Put the zero of the vertical y -axis at the center of the sphere and the positive direction down. Then the water goes from $y = 1$ to $y = 2$. A slice perpendicular to the y -axis at height y is a disk of radius $r = \sqrt{4 - y^2}$.

$$V = \int \pi r^2 dy = \int_1^2 \pi (\sqrt{4 - y^2})^2 dy = \int_1^2 \pi (4 - y^2) dy = \pi \left[4y - \frac{y^3}{3} \right]_1^2 = \frac{5\pi}{3}$$

14. (10 points) How much work is done in pumping the water out the top of the bowl shown in problem 13? Leave the density as ρ and the acceleration of gravity as g .

The volume of the slice at height y is $dV = \pi (\sqrt{4 - y^2})^2 dy = \pi (4 - y^2) dy$. So its weight is $dF = \rho g dV = \rho g \pi (4 - y^2) dy$. This slice must be lifted a distance $D = y$. So the work done is $W = \int D dF = \int_1^2 y \rho g \pi (4 - y^2) dy = \rho g \pi \int_1^2 (4y - y^3) dy = \rho g \pi \left[2y^2 - \frac{y^4}{4} \right]_1^2$

$$= \rho g \pi [8 - 4] - \rho g \pi \left[2 - \frac{1}{4} \right] = \frac{9\rho g \pi}{4}$$